

Candidate's Examination Number _____

SMZ

ZANZIBAR EXAMINATIONS COUNCIL

FORM THREE ENTRANCE EXAMINATION

041

MATHEMATICS

TIME: 2:30 HOURS

TUESDAY 29th NOVEMBER, 2017 am

INSTRUCTIONS TO CANDIDATES

- 1. This paper consists of TWO (2) sections A and B.**
- 2. Answer ALL questions in section A and any FOUR (4) questions in section B.**
- 3. Write your answers in the spaces provided.**
- 4. Write your examination number on each page.**
- 5. Cellular phones and calculators are not allowed in the examination room.**

FOR EXAMINER'S USE ONLY		
QUESTION NUMBER	MARKS	SIGNATURE
1.		
2.		
3.		
4.		
5.		
6.		
7.		
8.		
9		
10		
11.		
12.		
13.		
14.		
TOTAL		

This paper consists of 18 printed pages

- ii) Asha is 12 years old. Her mother is $3\frac{3}{4}$ times as old as she is.
How old is her mother?

2. a) i) Find the value of $\sqrt{\frac{m}{n}}$, when $m = 81$ and $n = 9$.

- ii) Find the reciprocal of 4.5

- b) i) Why 2 and -3 cannot be combined in the expression $\sqrt{5} + 2 - 3\sqrt{5}$.

- ii) Rationalize the denominator of the expression $\frac{6}{\sqrt{7}-2}$

3. a) i) Find $87\frac{1}{2}\%$ of 8,000/—

- ii) A pencil is 6cm long. How much is left after cutting off 8mm?

- b) Khamis drinks 3000cm^3 of milk in a day. How man liters does khamis drink in a week?

4. a) i) Simplify the expression $6m \div 2 + 2mn \div n$.

- ii) Solve the equation $4x + 3 = 2x + 15$.

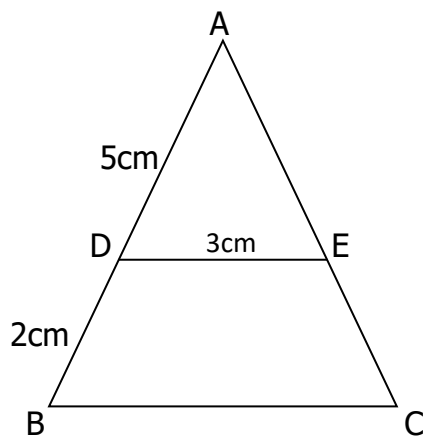
- b) Given that $\log a = 2.4$ and $\log b = 1.5$. Find $\log \left(\frac{b}{a}\right)^2$.

5. a) Write 524.3678 correct to:

- i) **Four** significant figure

- ii) **Three** decimal places

- b) In the figure below DE is parallel to BC, find the length of \overrightarrow{BC} .



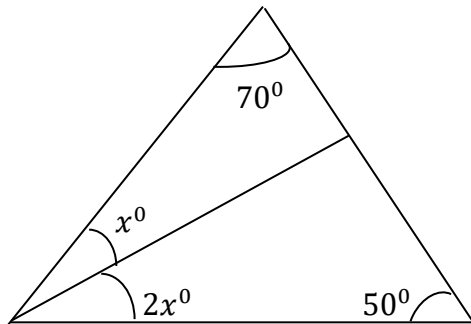
Candidate's Examination Number _____

6. a) The running track is a circle, with radius 40m. What is the length of the track?

- b) i) A compressor is bought for 120,000/- and sold for 150,000/-. What is the percentage profit?

- b) Find the actual length represented by 4cm on a map, if the scale used to draw a map is 1:100000.

8. a) In the figure below, find the value of x°



- b) If $x * y$ is defined as $3x - y$ for any integers of x and y , find:

i) $(5 * 2)$

ii) $y, \text{ if } (4 * y) = 6$

SECTION B: (40 Marks)

Answer any FOUR (4) questions in this section

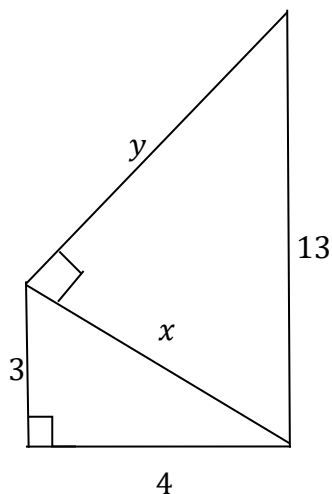
9. Carefully study the frequency distribution table which shows the marks for 40 students in mathematics examination.

Marks	11 - 20	21 -30	31 - 40	41-50	51-60	61-70
frequency	3	9	12	8	6	2

- a) Draw the histogram for the data (on the graph paper).
 b) Draw cumulative frequency curve O give (on the graph paper).

10. a) Is a triangle whose sides are 11cm , 7cm and 8cm a right angled triangle?

- b) Find the length marked x and y in the figure below.



11. a) Find the image of point $P(3, -1)$ under translation which move 2 right and 3 up.

- b) A triangle ABC with the coordinates $A(-2,1)$, $B(3,3)$ and $C(4,1)$ is reflected along the x axis. Find

- i. The coordinate of the image triangle $A'B'C'$.

- b) i) List all subsets of the set $A = \{p, q, r\}$

- ii) In class of 30 pupils 12 are taking geography, 8 are taking both history and geography. How many students in this class take history, if 6 students take neither geography nor history?


14. a) i) Find the value of x

$$\left(\frac{1}{2}\right)^x \times \left(\frac{1}{4}\right)^x = 64$$


- ii) If $x^2 + kx + 9$ is perfect square, find the value of k

- b) Solve for x in the quadratic equation $x^2 + 5x + 6 = 0$

Candidate's Examination Number _____



Candidate's Examination Number _____



Candidate's Examination Number _____

FOR ROUGH WORK